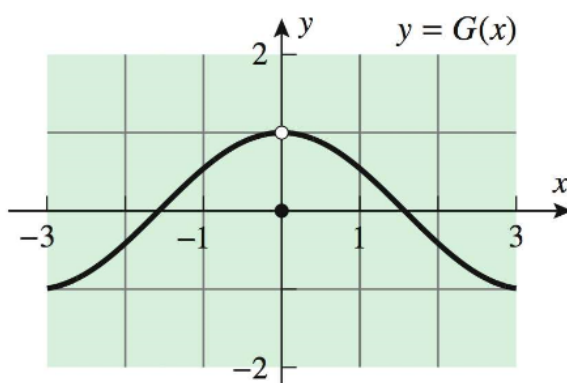


Limits Worksheet

1. For the function G graphed in the accompanying figure, find

(a) $\lim_{x \rightarrow 0^-} G(x) = 1$ (b) $\lim_{x \rightarrow 0^+} G(x) = 1$

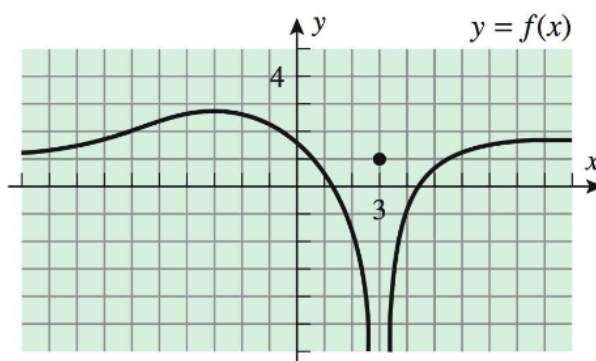
(c) $\lim_{x \rightarrow 0} G(x) = 1$ (b) $G(0) = 0$



2. For the function f graphed in the accompanying figure, find

(a) $\lim_{x \rightarrow 3^-} f(x) = -\infty$ (b) $\lim_{x \rightarrow 3^+} f(x) = -\infty$

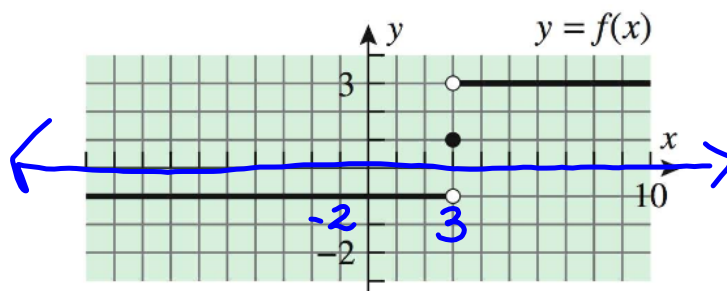
(c) $\lim_{x \rightarrow 3} f(x) = -\infty$ (b) $f(3) = 1$



3. For the function f graphed in the accompanying figure, find

(a) $\lim_{x \rightarrow 3^-} f(x) = -1$ (b) $\lim_{x \rightarrow 3^+} f(x) = 3$

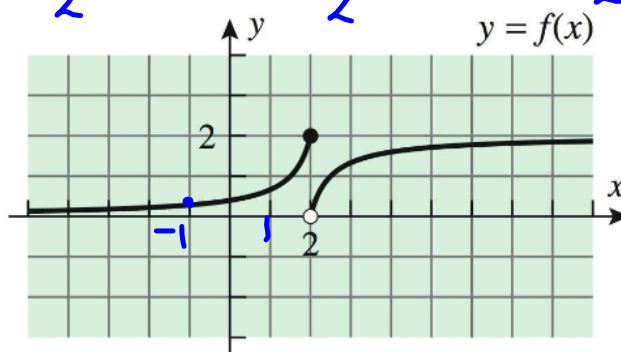
(c) $\lim_{x \rightarrow 3} f(x)$ DNE (b) $f(3) = 1$



4. For the function f graphed in the accompanying figure, find

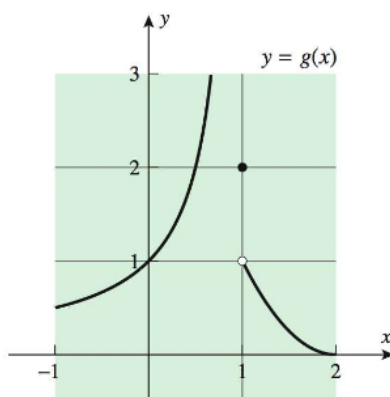
(a) $\lim_{x \rightarrow -1^-} f(x) = .25$ (b) $\lim_{x \rightarrow -1^+} f(x) = .25$ (c) $\lim_{x \rightarrow -1} f(x) = .25$

(c) $\lim_{x \rightarrow 2^-} f(x) = 2$ (d) $\lim_{x \rightarrow 2^+} f(x) = 0$ (e) $\lim_{x \rightarrow 2} f(x)$ DNE



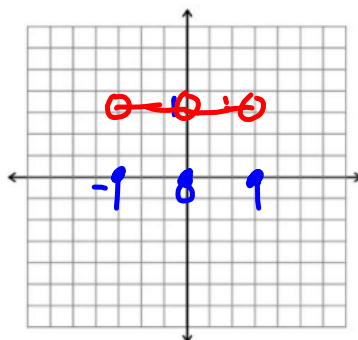
5. For the function g graphed in the accompanying figure, find

- (a) $\lim_{x \rightarrow 1^-} g(x)$ $+\infty$ (b) $\lim_{x \rightarrow 1^+} g(x)$ 1
 (c) $\lim_{x \rightarrow 1} g(x)$ DNE (b) $g(1) = 2$



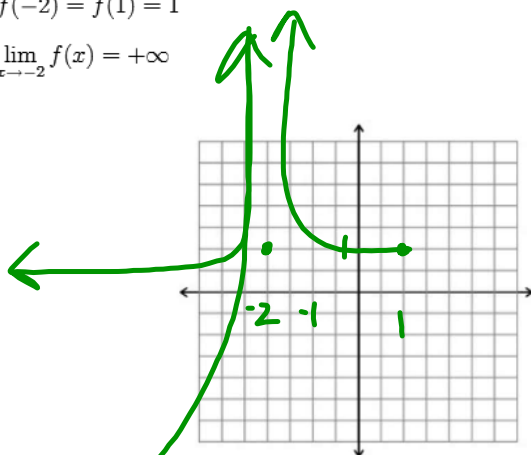
6. On the axes provided below, sketch a possible graph for a function f with the specified properties.

- i. the domain is $[-1, 1]$
- ii. $f(-1) = f(0) = f(1) = 0$
- iii. $\lim_{x \rightarrow -1^+} f(x) = \lim_{x \rightarrow 0} f(x) = \lim_{x \rightarrow 1^-} f(x) = 1$



7. On the axes provided below, sketch a possible graph for a function f with the specified properties.

- i. the domain is $[-\infty, 1]$
- ii. $f(-2) = f(1) = 1$
- iii. $\lim_{x \rightarrow -2^-} f(x) = +\infty$



8. On the axes provided below, sketch a possible graph for a function f with the specified properties.

- i. the domain is $[-2, 1]$
- ii. $f(-2) = f(0) = f(1) = 0$
- iii. $\lim_{x \rightarrow -2^+} f(x) = 2$, $\lim_{x \rightarrow 0} f(x) = 0$, $\lim_{x \rightarrow 1^-} f(x) = 1$

